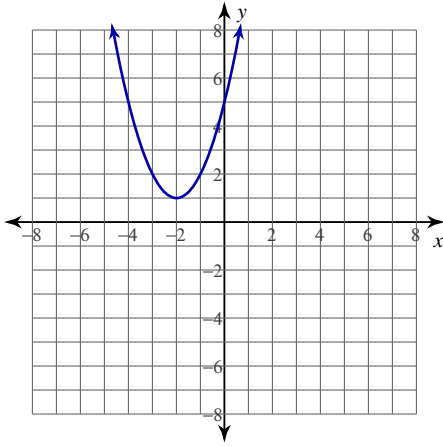


Rolle's Theorem

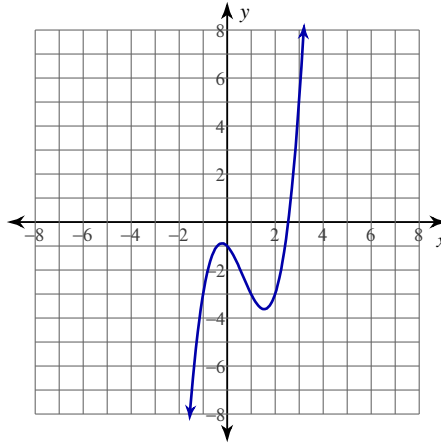
Date _____ Period _____

For each problem, find the values of c that satisfy Rolle's Theorem.

1) $y = x^2 + 4x + 5$; $[-3, -1]$



2) $y = x^3 - 2x^2 - x - 1$; $[-1, 2]$



3) $y = -x^3 + 2x^2 + x - 6$; $[-1, 2]$

4) $y = x^3 - 4x^2 - x + 7$; $[-1, 4]$

5) $y = -x^3 + 2x^2 + x - 1$; $[-1, 2]$

6) $y = x^3 - x^2 - 4x + 3$; $[-2, 2]$

7) $y = \frac{-x^2 - 2x + 15}{-x + 4}$; $[-5, 3]$

8) $y = \frac{x^2 - 2x - 15}{-x + 6}$; $[-3, 5]$

$$9) y = \frac{-x^2 + 2x + 15}{x + 4}; [-3, 5]$$

$$10) y = \frac{x^2 + x - 6}{-x + 3}; [-3, 2]$$

$$11) y = -2\sin(2x); [-\pi, \pi]$$

$$12) y = \sin(2x); [-\pi, \pi]$$

For each problem, determine if Rolle's Theorem can be applied. If it can, find all values of c that satisfy the theorem. If it cannot, explain why not.

$$13) y = \frac{x^2 - x - 12}{x + 4}; [-3, 4]$$

$$14) y = \frac{-x^2 - 2x + 8}{-x + 3}; [-4, 2]$$

$$15) y = \frac{-x^2 + 36}{x + 7}; [-6, 6]$$

$$16) y = \frac{-x^2 + 4}{4x}; [-2, 2]$$

$$17) y = 2\tan(x); [-\pi, \pi]$$

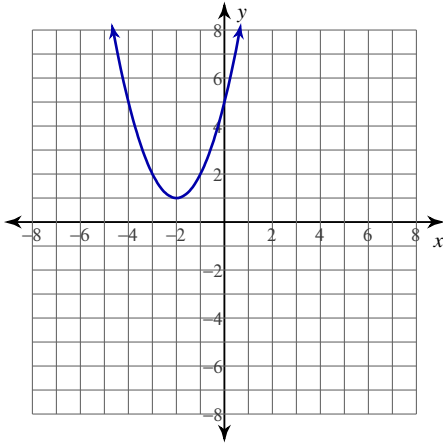
$$18) y = -2\cos(2x); [-\pi, \pi]$$

Rolle's Theorem

Date _____ Period _____

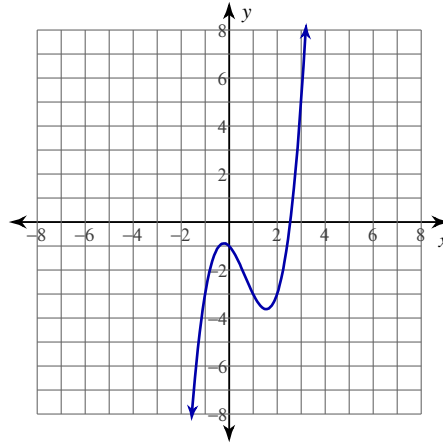
For each problem, find the values of c that satisfy Rolle's Theorem.

1) $y = x^2 + 4x + 5$; $[-3, -1]$



$\{-2\}$

2) $y = x^3 - 2x^2 - x - 1$; $[-1, 2]$



$\left\{ \frac{2 + \sqrt{7}}{3}, \frac{2 - \sqrt{7}}{3} \right\}$

3) $y = -x^3 + 2x^2 + x - 6$; $[-1, 2]$

$\left\{ \frac{2 - \sqrt{7}}{3}, \frac{2 + \sqrt{7}}{3} \right\}$

4) $y = x^3 - 4x^2 - x + 7$; $[-1, 4]$

$\left\{ \frac{4 + \sqrt{19}}{3}, \frac{4 - \sqrt{19}}{3} \right\}$

5) $y = -x^3 + 2x^2 + x - 1$; $[-1, 2]$

$\left\{ \frac{2 - \sqrt{7}}{3}, \frac{2 + \sqrt{7}}{3} \right\}$

6) $y = x^3 - x^2 - 4x + 3$; $[-2, 2]$

$\left\{ \frac{1 + \sqrt{13}}{3}, \frac{1 - \sqrt{13}}{3} \right\}$

7) $y = \frac{-x^2 - 2x + 15}{-x + 4}$; $[-5, 3]$

$\{1\}$

8) $y = \frac{x^2 - 2x - 15}{-x + 6}$; $[-3, 5]$

$\{3\}$

$$9) y = \frac{-x^2 + 2x + 15}{x + 4}; [-3, 5]$$

$$\{-1\}$$

$$10) y = \frac{x^2 + x - 6}{-x + 3}; [-3, 2]$$

$$\{3 - \sqrt{6}\}$$

$$11) y = -2\sin(2x); [-\pi, \pi]$$

$$\left\{-\frac{3\pi}{4}, -\frac{\pi}{4}, \frac{\pi}{4}, \frac{3\pi}{4}\right\}$$

$$12) y = \sin(2x); [-\pi, \pi]$$

$$\left\{-\frac{3\pi}{4}, -\frac{\pi}{4}, \frac{\pi}{4}, \frac{3\pi}{4}\right\}$$

For each problem, determine if Rolle's Theorem can be applied. If it can, find all values of c that satisfy the theorem. If it cannot, explain why not.

$$13) y = \frac{x^2 - x - 12}{x + 4}; [-3, 4]$$

$$\{-4 + 2\sqrt{2}\}$$

$$14) y = \frac{-x^2 - 2x + 8}{-x + 3}; [-4, 2]$$

$$\{3 - \sqrt{7}\}$$

$$15) y = \frac{-x^2 + 36}{x + 7}; [-6, 6]$$

$$\{-7 + \sqrt{13}\}$$

$$16) y = \frac{-x^2 + 4}{4x}; [-2, 2]$$

The function is not continuous on $[-2, 2]$

$$17) y = 2\tan(x); [-\pi, \pi]$$

The function is not continuous on $[-\pi, \pi]$

$$18) y = -2\cos(2x); [-\pi, \pi]$$

$$\left\{-\frac{\pi}{2}, 0, \frac{\pi}{2}\right\}$$